

Released Items

Student Name: \_\_\_\_\_

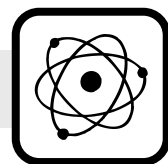
Fall 2014  
NC Final Exam  
**Physics**



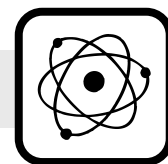
# Student Booklet



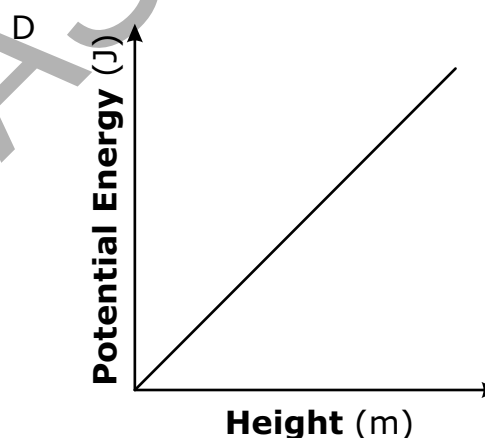
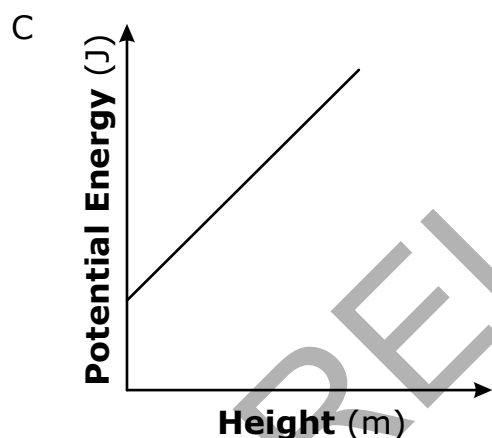
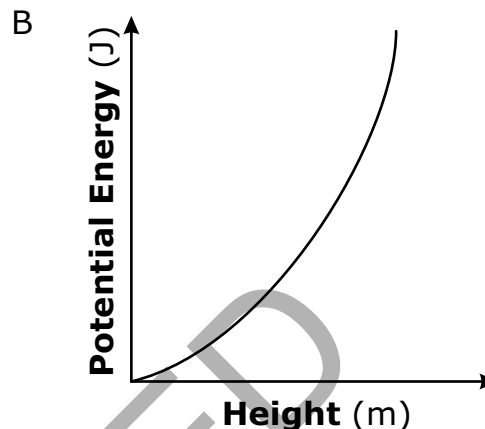
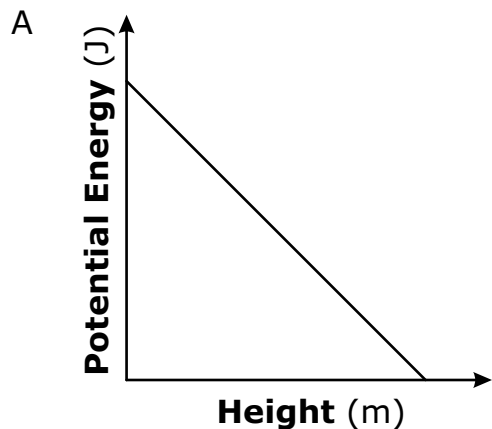
Public Schools of North Carolina  
State Board of Education  
Department of Public Instruction  
Raleigh, North Carolina 27699-6314

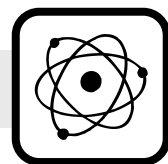


- 1 A 3,150-kg truck accelerates from 4.2 m/s to 7.8 m/s in 14 s. Which describes the average force needed for the truck to accelerate under these conditions?
- A 810 N  
B 950 N  
C 1,800 N  
D 2,700 N
- 2 A 45-kg boy throws a 0.50-kg ball at 15 m/s. Then, a 60-kg boy throws the same ball at 15 m/s. Which boy generates more momentum?
- A Neither boy generates any momentum.  
B The 45-kg boy generates more momentum.  
C The 60-kg boy generates more momentum.  
D Both boys generate the same amount of momentum.
- 3 A machine pushes a 400.0-N box forward with a horizontal force of 50.0 N for 10.0 s. By how much does the momentum of the box change due to the machine? (Ignore friction.)
- A  $4.50 \times 10^3 \text{ N} \cdot \text{s}$   
B  $4.00 \times 10^3 \text{ N} \cdot \text{s}$   
C  $3.50 \times 10^3 \text{ N} \cdot \text{s}$   
D  $5.00 \times 10^2 \text{ N} \cdot \text{s}$

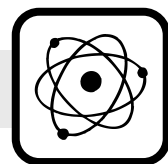


- 4 Which graph represents the relationship between the gravitational potential energy and the height of an object relative to the ground?

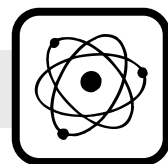




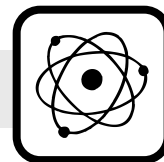
- 5 A circuit consists of a single resistor,  $R_1$ , and a 9-V battery. A second identical resistor,  $R_2$ , is added to the circuit in parallel with  $R_1$ . How does the potential difference across  $R_1$  change after  $R_2$  is added?
- A The potential difference decreases because a 9-V battery cannot handle resistors in parallel.
  - B The potential difference decreases because two resistors in parallel can split the 9 V equally.
  - C The potential difference remains the same because resistors in parallel do not cause a change in voltage.
  - D The potential difference remains the same because resistors in parallel create extra current that balances the extra resistance.
- 6 Two rocks with masses of 5 kg and 10 kg are dropped from a height of 20 m above the ground. Just before they reach the ground, which statement is true about the rocks? (Ignore all friction.)
- A The value for the acceleration of the 5-kg rock is the same as the value for the 10-kg rock, but the velocity values are different.
  - B The values for the acceleration and velocity of the 5-kg rock are the same as the values for the 10-kg rock.
  - C The values for the acceleration and velocity of the 5-kg rock are less than the values for the 10-kg rock.
  - D The values for the acceleration and velocity of the 5-kg rock are greater than the values for the 10-kg rock.



- 7 The atoms of both copper and rubber contain protons and electrons; however, copper is more conductive than rubber. Why is copper able to conduct more electricity?
- A Copper contains free electrons, and rubber contains bound electrons.
  - B Rubber contains free electrons, and copper contains bound electrons.
  - C Copper contains free protons, and rubber contains bound protons.
  - D Rubber contains free protons, and copper contains bound protons.
- 8 A positive glass rod is placed near a neutral metallic sphere. If they do not touch, what happens to the charges inside the sphere?
- A Like charges attract, which causes the sphere to become polarized.
  - B Unlike charges attract, which causes the sphere to become polarized.
  - C Like charges attract, which causes the sphere to become charged.
  - D Unlike charges attract, which causes the sphere to become charged.
- 9 An electron loses  $2.00 \times 10^{-15}$  J of energy traveling to the screen of a laptop computer. Why is the energy loss small?
- A because the charge is small
  - B because the charge is large
  - C because the resistance is small
  - D because the resistance is large



- 10 How does a large number of turns in an electromagnet create a strong magnetic field?
- A Each turn increases the amount of time it takes for the current to travel through the wire.
  - B Each turn decreases the amount of time it takes for the current to travel through the wire.
  - C Each turn increases the amount of induction produced by the current in the wire.
  - D Each turn decreases the amount of induction produced by the current in the wire.
- 11 Two current-carrying solenoids are placed near each other. Which would increase the amount of mutual inductance the pair of coils experiences?
- A aligning the coils perpendicular to each other
  - B aligning the coils parallel to each other
  - C using only aluminum wiring
  - D using only copper wiring
- 12 An object is in uniform, circular motion and is moving at a speed of 2.3 m/s. How does the speed of the object change if the centripetal force and the radius remain constant and the mass of the object quadruples?
- A Its speed is cut in half, because centripetal force is based on the square root of velocity.
  - B Its speed is cut in half, because centripetal force is based on velocity squared.
  - C Its speed doubles, because centripetal force is based on the square root of velocity.
  - D Its speed doubles, because centripetal force is based on velocity squared.

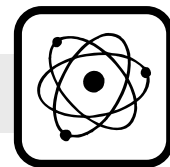


**This is the end of the Physics Released Items.**

**Directions:**

- 1. Look back over your answers for the test questions.**
- 2. Make sure all your answers are entered on the answer sheet. Only what is entered on your answer sheet will be scored.**
- 3. Put all of your papers inside your test book and close the test book.**
- 4. Place your calculator on top of the test book.**
- 5. Stay quietly in your seat until your teacher tells you that testing is finished.**
- 6. Remember, teachers are not allowed to discuss items from the test with you, and you are not allowed to discuss with others any of the test questions or information contained within the test.**

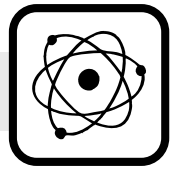
RELEASED



Physics  
RELEASED Items<sup>1</sup>  
Fall 2014  
Answer Key

Item Number	Type <sup>2</sup>	Key	Percent Correct <sup>3</sup>	Standard
1	MC	A	78%	Phy.1.2.1
2	MC	D	66%	Phy.1.3.2
3	MC	D	50%	Phy.1.3.2
4	MC	D	66%	Phy.2.1.1
5	MC	C	55%	Phy.2.3.1
6	MC	B	56%	Phy.1.1.1
7	MC	A	79%	Phy.3.1.1
8	MC	B	51%	Phy.3.1.4
9	MC	A	30%	Phy.3.1.5
10	MC	C	65%	Phy.3.2.2
11	MC	B	48%	Phy.3.2.3
12	MC	B	56%	Phy.1.2.5



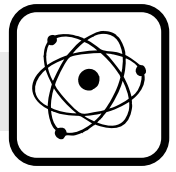


<sup>1</sup>These released items were administered to students during a previous test administration. This sample set of released items may not reflect the breadth of the standards assessed and/or the range of item difficulty found on the NC Final Exam. Additional items may be reviewed at <http://www.ncpublicschools.org/accountability/common-exams/released-forms/>. Additional information about the NC Final Exam is available in the *Assessment Specification* for each exam located at <http://www.ncpublicschools.org/accountability/common-exams/specifications/>.

<sup>2</sup>This NC Final Exam contains only multiple-choice (MC) items.

<sup>3</sup>Percent correct is the percentage of students who answered the item correctly during the Spring 2014 administration.

RELEASED



## Standard Descriptions

Only clarifying objective descriptions addressed by the released items in this booklet are listed below. A complete list of the North Carolina Essential Standards for Science and Social studies may be reviewed at <http://www.ncpublicschools.org/acre/standards/new-standards/>.

### **Phy.1.1.1 (Forces and Motion)**

Analyze motion graphically and numerically using vectors, graphs and calculations.

### **Phy.1.2.1 (Forces and Motion)**

Analyze forces and systems of forces graphically and numerically using vectors, graphs and calculations.

### **Phy.1.2.5 (Forces and Motion)**

Analyze basic forces related to rotation in a circular path (centripetal force).

### **Phy.1.3.2 (Forces and Motion)**

Analyze the motion of objects based on the relationship between momentum and impulse.

### **Phy.2.1.1 (Energy: Conservation and Transfer)**

Interpret data on work and energy presented graphically and numerically.

### **Phy.2.3.1 (Energy: Conservation and Transfer)**

Explain Ohm's law in relation to electric circuits.

### **Phy.3.1.1 (Interactions of Energy and Matter)**

Explain qualitatively the fundamental properties of the interactions of charged objects.

### **Phy.3.1.4 (Interactions of Energy and Matter)**

Explain the mechanisms for producing electrostatic charges, including charging by friction, conduction, and induction.

### **Phy.3.1.5 (Interactions of Energy and Matter)**

Explain how differences in electrostatic potentials relate to the potential energy of charged objects.

### **Phy.3.2.2 (Interactions of Energy and Matter)**

Explain how electric currents produce various magnetic fields.

### **Phy.3.2.3 (Interactions of Energy and Matter)**

Explain how transformers and power distributions are applications of electromagnetism.